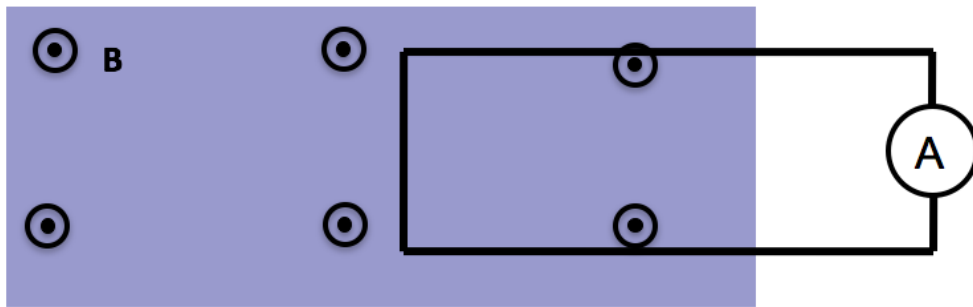


Consider two situations:

1) Loop moves to right with speed $|v|$

2) Magnet moves to left with (same) speed $|v|$



What will the ammeter read in each case? (Assume that CCW current \Rightarrow positive ammeter reading)

A. $I_1 > 0, I_2 = 0$

B. $I_1 = I_2 > 0$

C. $I_1 = -I_2 > 0$

D. $I_1 = I_2 = 0$

E. Something different/not sure

ANNOUNCEMENTS

- Homework 4 (Due Feb 8)
 - Project problem is longer!
- Quiz 2 - Next Friday (Motional EMF)
 - Discuss the differences between:
 - $\mathcal{E} = \oint \mathbf{f} \cdot d\mathbf{l}$ and $\mathcal{E} = -\frac{d\Phi_B}{dt}$
 - Solve a motional EMF problem and discuss the direction of the current
- DC out of town (Feb 4-8)
 - Rachel Henderson will cover
- Film crew will be here on Wednesday

Faraday found that EMF is proportional to the negative time rate of change of B. EMF is also the line integral of a **force/charge**. The force is \mathbf{f}_q in the expression:

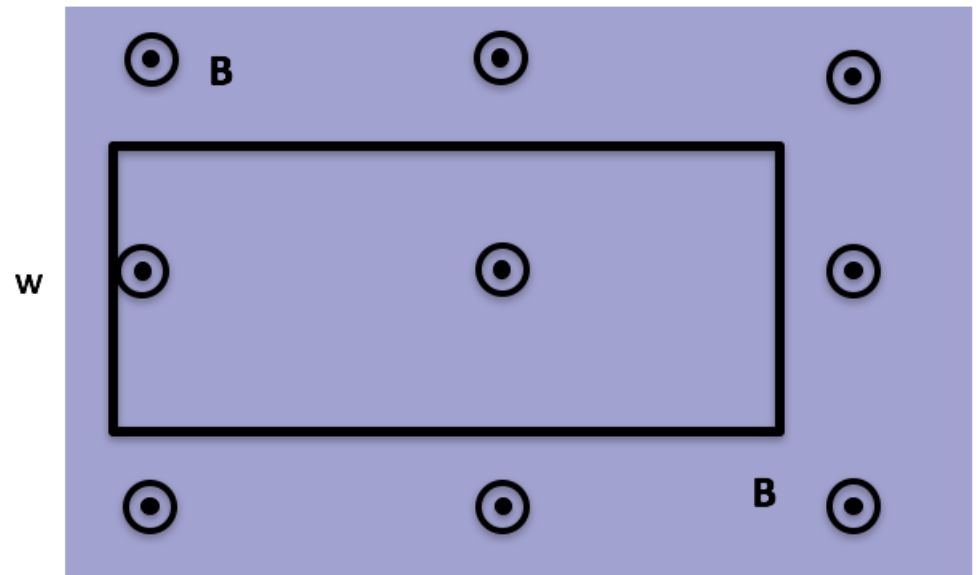
$$\mathcal{E} = \oint \mathbf{f}_q \cdot d\mathbf{l}$$

That force is:

- A. the magnetic Lorentz force.
- B. an electric force.
- C. the strong nuclear force.
- D. the gravitational force.
- E. an entirely new force.

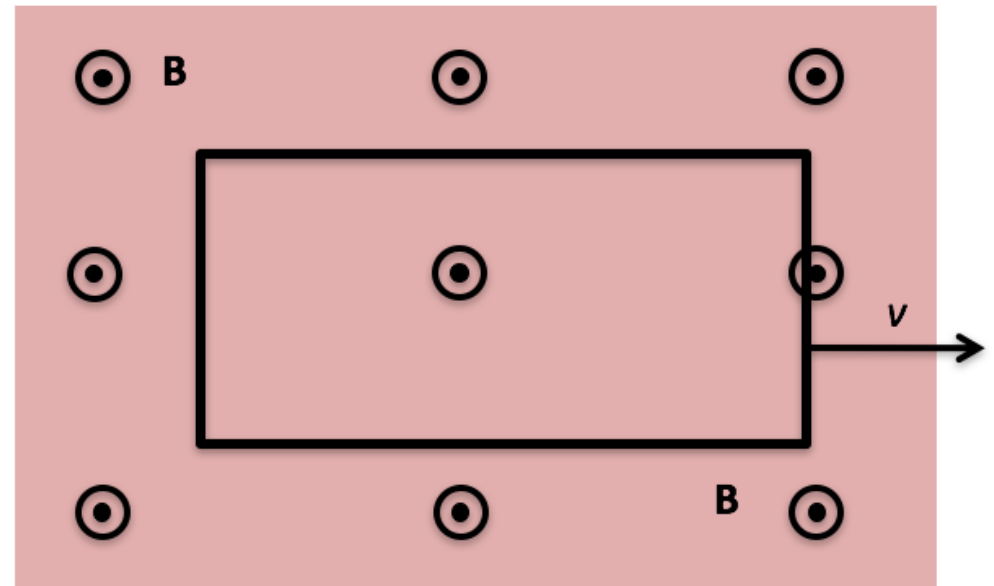
A stationary rectangular metal loop is in a region of uniform magnetic field \mathbf{B} , which has magnitude B decreasing with time as $B = B_0 - kt$. What is the direction of the field induced B-field created by the induced current in the loop, in the plane region inside the loop?

- A. Into the screen
- B. Out of the screen
- C. To the left
- D. To the right
- E. other/??



A rectangular metal loop is moving thru a region of constant uniform magnetic field \mathbf{B} , out of page, with constant speed v , as shown. Is there a non-zero emf around the loop?

- A. Yes, current will flow CW
- B. Yes, current will flow CCW
- C. No



A loop of wire is near a long straight wire which is carrying a large current I , which is **decreasing**. The loop and the straight wire are in the same plane and are positioned as shown. The current induced in the loop is:

- A. counter-clockwise
- B. clockwise
- C. zero.

