

**True or False:** The electric potential of a pure dipole is given exactly by:

$$V(r) = \frac{\mathbf{p} \cdot \mathbf{r}}{4\pi\epsilon_0 r^3}$$

- A. True
- B. False

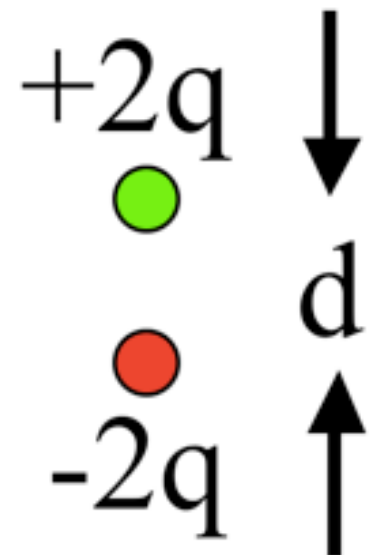
# ANNOUNCEMENTS

- Homework 7 Problem 5 graded as pure extra credit
- Exam 2 is coming up (2 weeks from today)
  - BPS 1415 (this room), 7pm-9pm, Nov 8th
  - Same format as Exam 1
  - Details next week

$$\mathbf{p} = \sum_i q_i \mathbf{r}_i$$

What is the magnitude of the dipole moment of this charge distribution?

- A.  $qd$
- B.  $2qd$
- C.  $3qd$
- D.  $4qd$
- E. It's not determined

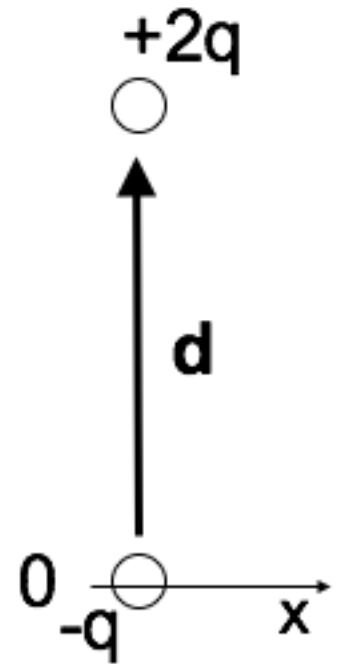


$$\mathbf{p} = \sum_i q_i \mathbf{r}_i$$

What is the dipole moment of this system?

(BTW, it is NOT overall neutral!)

- A.  $q\mathbf{d}$
- B.  $2q\mathbf{d}$
- C.  $\frac{3}{2}q\mathbf{d}$
- D.  $3q\mathbf{d}$
- E. Something else (or not defined)

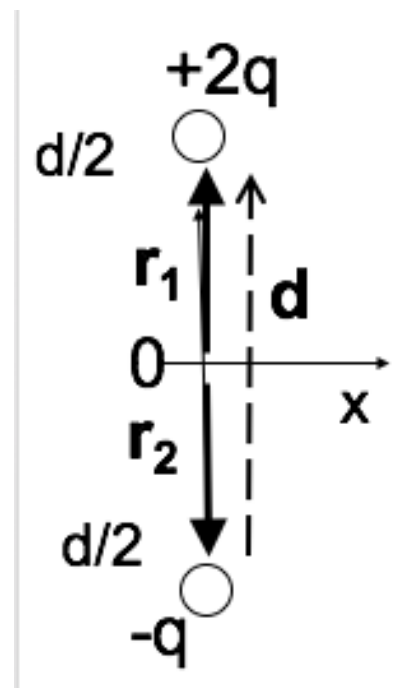


$$\mathbf{p} = \sum_i q_i \mathbf{r}_i$$

What is the dipole moment of this system?

(Same as last question, just shifted in  $z$ .)

- A.  $q\mathbf{d}$
- B.  $2q\mathbf{d}$
- C.  $\frac{3}{2}q\mathbf{d}$
- D.  $3q\mathbf{d}$
- E. Something else (or not defined)



You have a physical dipole,  $+q$  and  $-q$  a finite distance  $d$  apart. When can you use the expression:

$$V(\mathbf{r}) = \frac{1}{4\pi\epsilon_0} \frac{\mathbf{p} \cdot \hat{\mathbf{r}}}{r^2}$$

- A. This is an exact expression everywhere.
- B. It's valid for large  $r$
- C. It's valid for small  $r$
- D. No idea...

You have a physical dipole,  $+q$  and  $-q$  a finite distance  $d$  apart. When can you use the expression:

$$V(\mathbf{r}) = \frac{1}{4\pi\epsilon_0} \sum_i \frac{q_i}{\mathcal{R}_i}$$

- A. This is an exact expression everywhere.
- B. It's valid for large  $r$
- C. It's valid for small  $r$
- D. No idea...